

# Step Response Analysis. Frequency Response, Relation Between Model Descriptions

Automatic Control, Basic Course, Lecture 3

---

November 9, 2017

Lund University, Department of Automatic Control

1. Step Response Analysis
2. Frequency Response
3. Relation between Model Descriptions

# Step Response Analysis

---

# Step Response

From the last lecture, we know that if the input  $u(t)$  is a step, then the output in the Laplace domain is

$$Y(s) = G(s)U(s) = G(s)\frac{1}{s}$$

It is possible to do an inverse transform of  $Y(s)$  to get  $y(t)$ , but is it possible to claim things about  $y(t)$  by only studying  $Y(s)$ ?

We will study **how the poles affects the step response**. (The zeros will be discussed later).

# Initial and Final Value Theorem

Let  $F(s)$  be the Laplace transformation of  $f(t)$ , i.e.,  $F(s) = \mathcal{L}(f(t))(s)$ .

**Given that the limits below exist**<sup>1</sup>, it holds that:

$$\text{Initial value theorem} \quad \lim_{t \rightarrow 0} f(t) = \lim_{s \rightarrow +\infty} sF(s)$$

$$\text{Final value theorem} \quad \lim_{t \rightarrow +\infty} f(t) = \lim_{s \rightarrow 0} sF(s)$$

For a step response we have that:

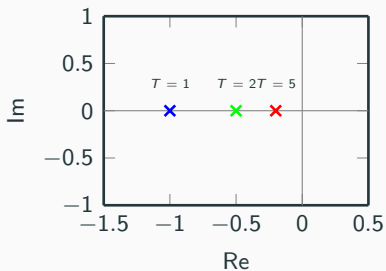
$$\lim_{t \rightarrow +\infty} y(t) = \lim_{s \rightarrow 0} sY(s) = \lim_{s \rightarrow 0} sG(s) \frac{1}{s} = G(0)$$

---

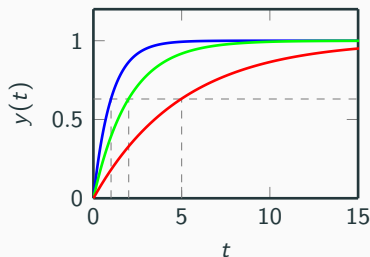
<sup>1</sup>When can we NOT apply the Final value theorem?

# First Order System

Singularity Chart



Step Response ( $K=1$ )



$$G(s) = \frac{K}{1 + sT}$$

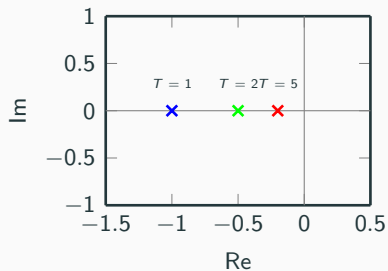
One pole in  $s = -1/T$

Step response:

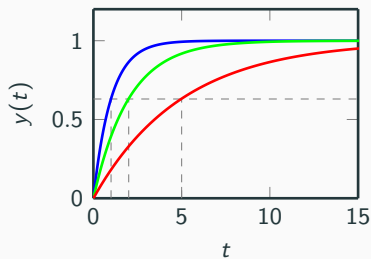
$$Y(s) = G(s) \frac{1}{s} = \frac{K}{s(1 + sT)} \xrightarrow{\mathcal{L}^{-1}} y(t) = K \left(1 - e^{-t/T}\right), \mathbf{t \geq 0}$$

# First Order System

Singularity Chart



Step Response (K=1)

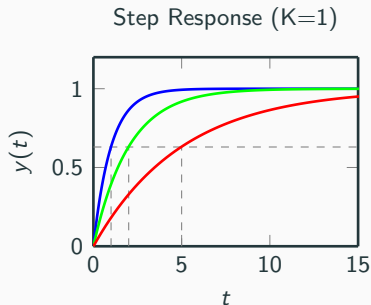
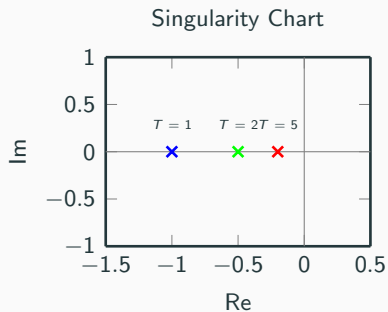


$$G(s) = \frac{K}{1 + sT}$$

Final value:

$$\lim_{t \rightarrow +\infty} y(t) = \lim_{s \rightarrow 0} sY(s) = \lim_{s \rightarrow 0} s \cdot \frac{K}{s(1 + sT)} = K$$

# First Order System



$$G(s) = \frac{K}{1 + sT}$$

$T$  is called the time-constant:

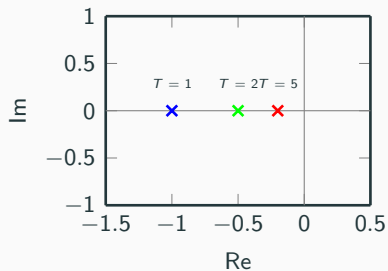
$$y(T) = K(1 - e^{-T/T}) = K(1 - e^{-1}) \approx 0.63K$$

i.e.,  $T$  is the time it takes for the step response to reach 63% of its final value

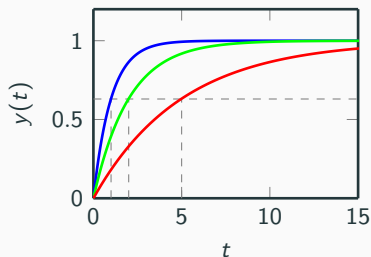


# First Order System

Singularity Chart



Step Response (K=1)

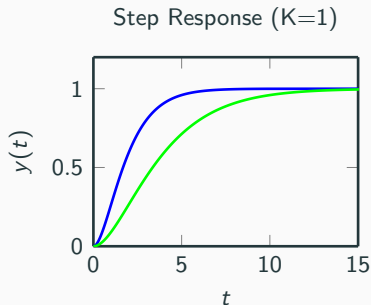
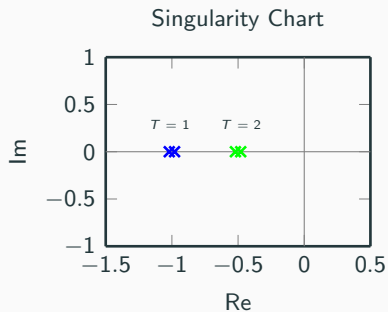


$$G(s) = \frac{K}{1 + sT}$$

Derivative at zero:

$$\lim_{t \rightarrow 0} \dot{y}(t) = \lim_{s \rightarrow +\infty} s \cdot sY(s) = \lim_{s \rightarrow +\infty} \frac{s^2 K}{s(1 + sT)} = \frac{K}{T}$$

## Second Order System With Real Poles

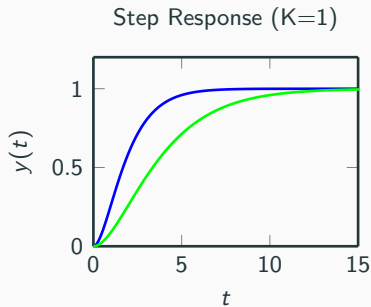
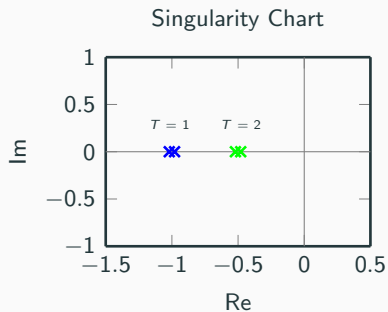


$$G(s) = \frac{K}{(1 + sT_1)(1 + sT_2)}$$

Poles in  $s = -1/T_1$  and  $s = -1/T_2$ . Step response:

$$y(t) = \begin{cases} K \left( 1 - \frac{T_1 e^{-t/T_1} - T_2 e^{-t/T_2}}{T_1 - T_2} \right) & T_1 \neq T_2 \\ K \left( 1 - e^{-t/T} - \frac{t}{T} e^{-t/T} \right) & T_1 = T_2 = T \end{cases}$$

## Second Order System With Real Poles

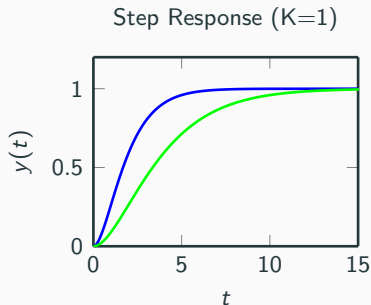
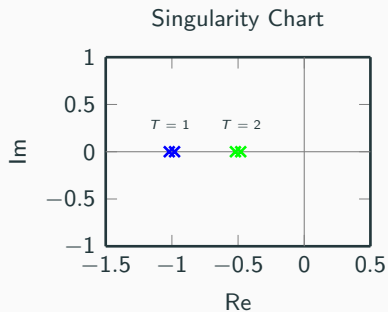


$$G(s) = \frac{K}{(1 + sT_1)(1 + sT_2)}$$

Final value:

$$\lim_{t \rightarrow +\infty} y(t) = \lim_{s \rightarrow 0} sY(s) = \lim_{s \rightarrow 0} \frac{sK}{s(1 + sT_1)(1 + sT_2)} = K$$

## Second Order System With Real Poles



$$G(s) = \frac{K}{(1 + sT_1)(1 + sT_2)}$$

Derivative at zero:

$$\lim_{t \rightarrow 0} \dot{y}(t) = \lim_{s \rightarrow +\infty} s \cdot sY(s) = \lim_{s \rightarrow +\infty} \frac{s^2 K}{s(1 + sT_1)(1 + sT_2)} = 0$$

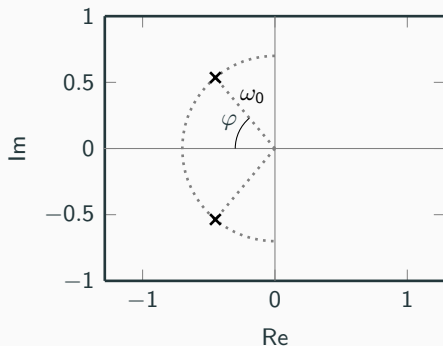
## Second Order System With Complex Poles

$$G(s) = \frac{K\omega_0^2}{s^2 + 2\zeta\omega_0s + \omega_0^2}, \quad 0 < \zeta < 1$$

Relative damping  $\zeta$ , related to the angle  $\varphi$

$$\zeta = \cos(\varphi)$$

Singularity Chart



## Second Order System With Complex Poles

$$G(s) = \frac{K\omega_0^2}{s^2 + 2\zeta\omega_0s + \omega_0^2}, \quad 0 < \zeta < 1$$

Inverse transformation for step response yields:

$$\begin{aligned} y(t) &= K \left( 1 - \frac{1}{\sqrt{1-\zeta^2}} e^{-\zeta\omega_0 t} \sin \left( \omega_0 \sqrt{1-\zeta^2} t + \arccos \zeta \right) \right) \\ &= K \left( 1 - \frac{1}{\sqrt{1-\zeta^2}} e^{-\zeta\omega_0 t} \sin \left( \omega_0 \sqrt{1-\zeta^2} t + \arcsin(\sqrt{1-\zeta^2}) \right) \right), \quad t \geq 0 \end{aligned}$$

## Second Order System With Complex Poles

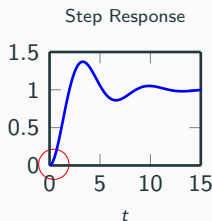
$$G(s) = \frac{K\omega_0^2}{s^2 + 2\zeta\omega_0s + \omega_0^2}, \quad 0 < \zeta < 1$$

Inverse transformation for step response yields:

$$\begin{aligned} y(t) &= K \left( 1 - \frac{1}{\sqrt{1-\zeta^2}} e^{-\zeta\omega_0 t} \sin \left( \omega_0 \sqrt{1-\zeta^2} t + \arccos \zeta \right) \right) \\ &= K \left( 1 - \frac{1}{\sqrt{1-\zeta^2}} e^{-\zeta\omega_0 t} \sin \left( \omega_0 \sqrt{1-\zeta^2} t + \arcsin(\sqrt{1-\zeta^2}) \right) \right), \quad t \geq 0 \end{aligned}$$

Exercise: Check of correct starting point of step response.

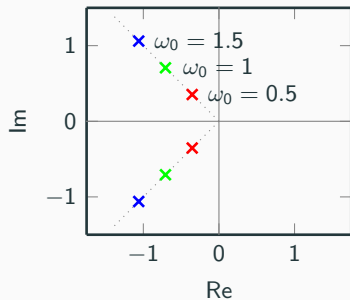
$$\begin{aligned} y(0) &= K \left( 1 - \frac{1}{\sqrt{1-\zeta^2}} e^0 \sin \left( \omega_0 \sqrt{1-\zeta^2} \cdot 0 + \arcsin(\sqrt{1-\zeta^2}) \right) \right) \\ &= K \left( 1 - \frac{1}{\sqrt{1-\zeta^2}} \cdot \sqrt{1-\zeta^2} \right) \\ &= 0 \end{aligned}$$



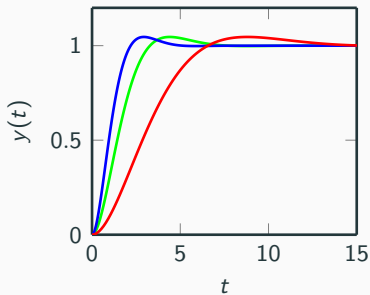
## Second Order System With Complex Poles

$$G(s) = \frac{K\omega_0^2}{s^2 + 2\zeta\omega_0s + \omega_0^2}, \quad 0 < \zeta < 1$$

Singularity Chart



Step Response (K=1)

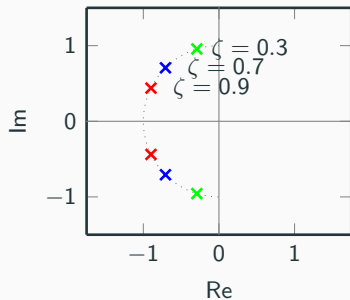




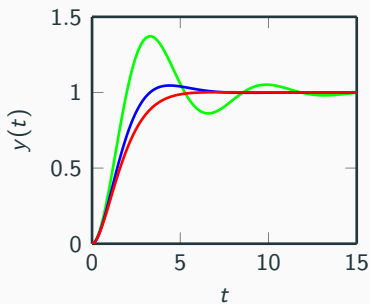
## Second Order System With Complex Poles

$$G(s) = \frac{K\omega_0^2}{s^2 + 2\zeta\omega_0s + \omega_0^2}, \quad 0 < \zeta < 1$$

Singularity Chart



Step Response (K=1)

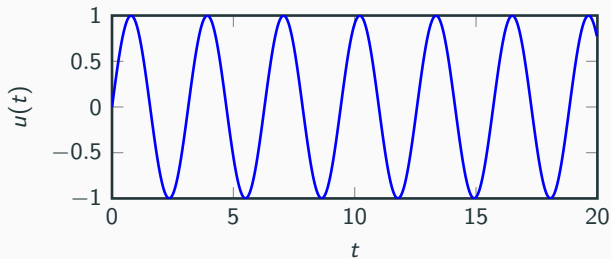
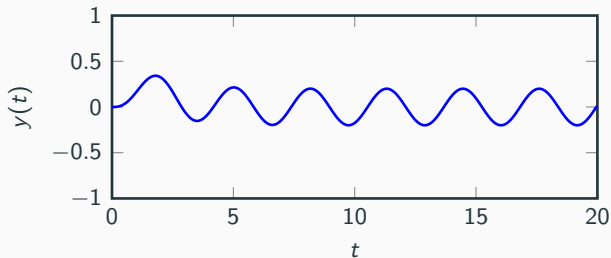


# Frequency Response

---

# Sinusoidal Input

Given a transfer function  $G(s)$ , what happens if we let the input be  $u(t) = \sin(\omega t)$ ?



# Sinusoidal Input

It can be shown that if the input is  $u(t) = \sin(\omega t)$ , the output<sup>2</sup> will be

$$y(t) = A \sin(\omega t + \varphi)$$

where

$$A = |G(i\omega)|$$

$$\varphi = \arg G(i\omega)$$

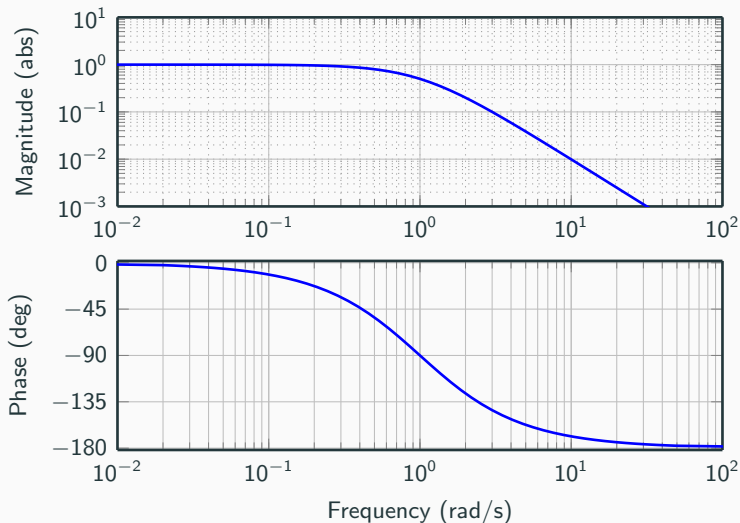
So if we determine  $a$  and  $\varphi$  for different frequencies  $\omega$ , we have a description of the transfer function.

---

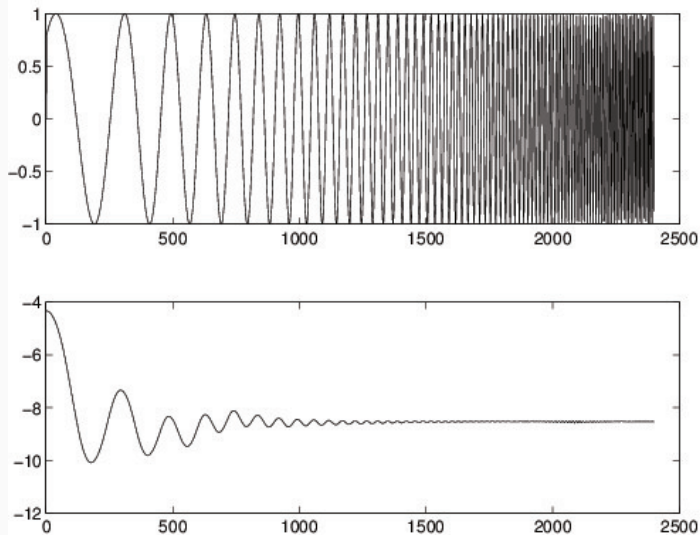
<sup>2</sup>after the transient has decayed

# Bode Plot

Idea: Plot  $|G(i\omega)|$  and  $\arg G(i\omega)$  for different frequencies  $\omega$ .


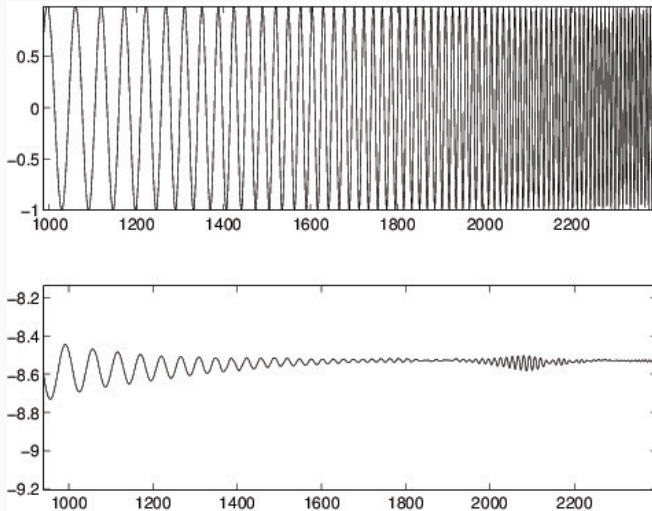


## Sinusoidal Input-Output: example with frequency sweep (chirp)



Resonance frequency of industrial robot IRB2000 visible in data.

# Sinusoidal Input-Output: example with frequency sweep (chirp)



Resonance frequency of industrial robot IRB2000 visible in data.

## Bode Plot - Products of Transfer Functions

Let

$$G(s) = G_1(s)G_2(s)G_3(s)$$

then

$$\log |G(i\omega)| = \log |G_1(i\omega)| + \log |G_2(i\omega)| + \log |G_3(i\omega)|$$

$$\arg G(i\omega) = \arg G_1(i\omega) + \arg G_2(i\omega) + \arg G_3(i\omega)$$

This means that we can construct Bode plots of transfer functions from simple "building blocks" for which we know the Bode plots.



## Bode Plot of $G(s) = K$

If

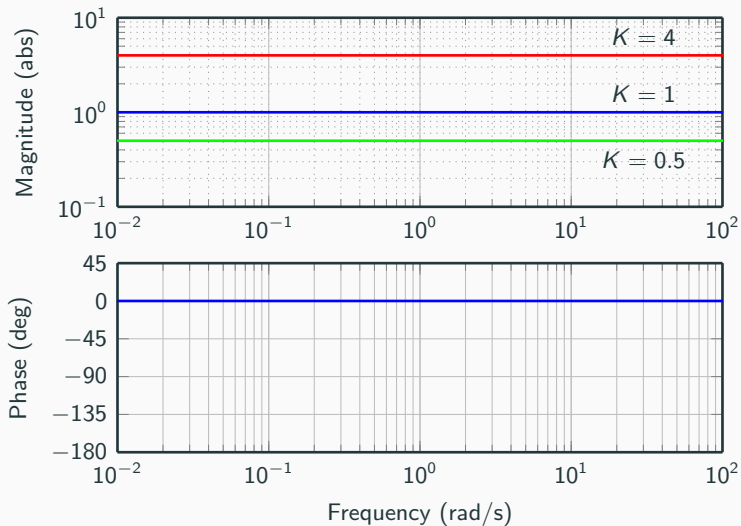
$$G(s) = K$$

then

$$\log |G(i\omega)| = \log(|K|)$$

$$\arg G(i\omega) = 0 \quad (\text{if } K > 0, \text{ else } +180 \text{ or } -180 \text{ deg})$$

# Bode Plot of $G(s) = K$



## Bode Plot of $G(s) = s^n$

If

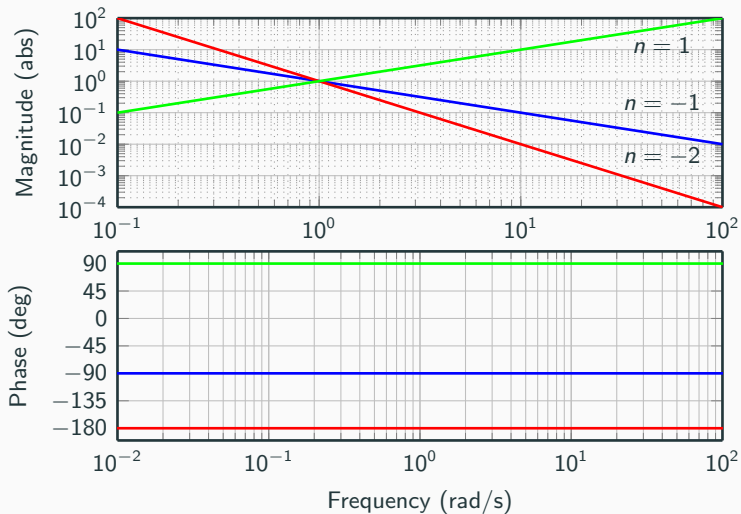
$$G(s) = s^n$$

then

$$\log |G(i\omega)| = n \log(\omega)$$

$$\arg G(i\omega) = n \frac{\pi}{2}$$

# Bode Plot of $G(s) = s^n$



## Bode Plot of $G(s) = (1 + sT)^n$

If

$$G(s) = (1 + sT)^n$$

then

$$\log |G(i\omega)| = n \log(\sqrt{1 + \omega^2 T^2})$$

$$\arg G(i\omega) = n \arg(1 + i\omega T) = n \arctan(\omega T)$$

For small  $\omega$

$$\log |G(i\omega)| \rightarrow 0$$

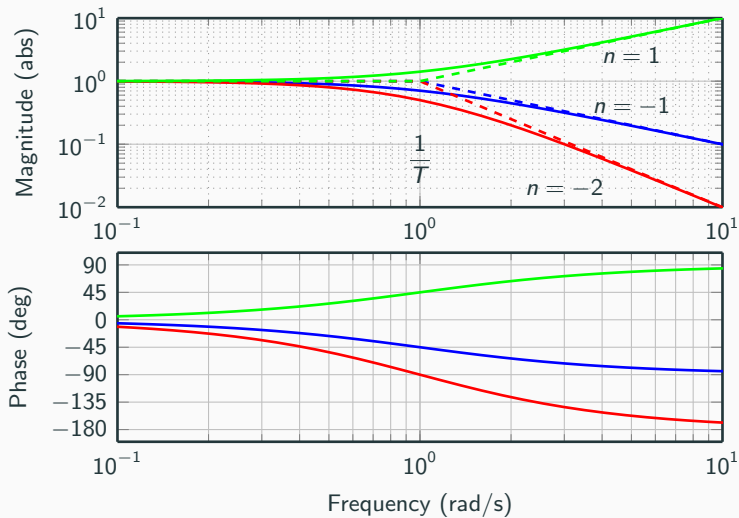
$$\arg G(i\omega) \rightarrow 0$$

For large  $\omega$

$$\log |G(i\omega)| \rightarrow n \log(\omega T)$$

$$\arg G(i\omega) \rightarrow n \frac{\pi}{2}$$

# Bode Plot of $G(s) = (1 + sT)^n$



## Bode Plot of $G(s) = (1 + 2\zeta s/\omega_0 + (s/\omega_0)^2)^n$

$$G(s) = (1 + 2\zeta s/\omega_0 + (s/\omega_0)^2)^n$$

For small  $\omega$

$$\log |G(i\omega)| \rightarrow 0$$

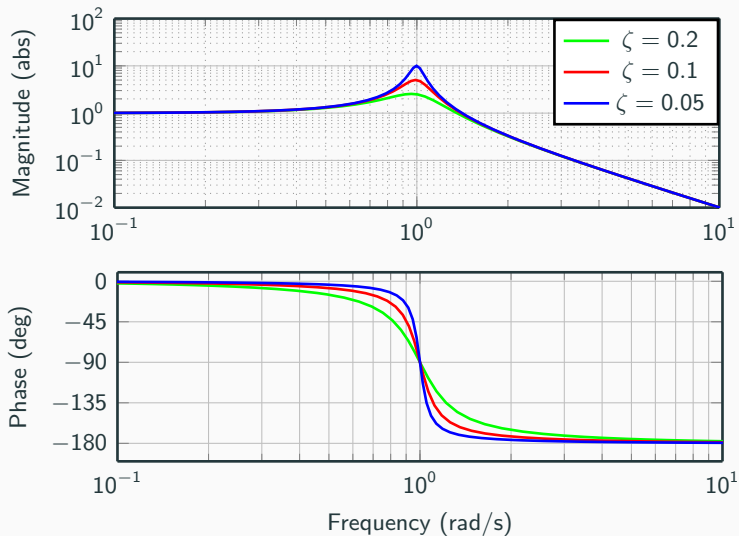
$$\arg(i\omega) \rightarrow 0$$

For large  $\omega$

$$\log |G(i\omega)| \rightarrow 2n \log \left( \frac{\omega}{\omega_0} \right)$$

$$\arg G(i\omega) \rightarrow n\pi$$

# Bode Plot of $G(s) = (1 + 2\zeta s/\omega_0 + (s/\omega_0)^2)^n$





## Bode Plot of $G(s) = e^{-sL}$

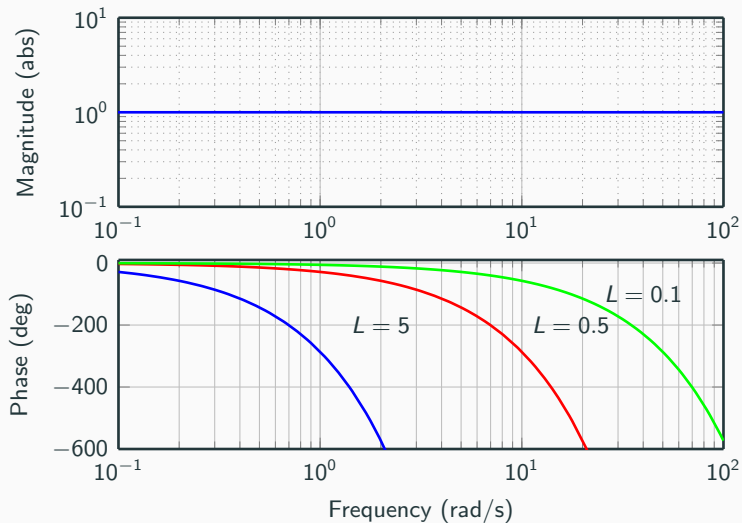
$$G(s) = e^{-sL}$$

Describes a pure time delay with delay  $L$ , i.e.  $y(t) = u(t - L)$

$$\log |G(i\omega)| = 0$$

$$\arg G(i\omega) = -\omega L$$

# Bode Plot of $G(s) = e^{-sL}$

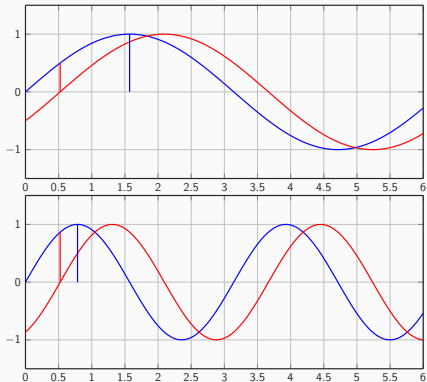


# Bode Plot of $G(s) = e^{-sL}$

**Same delay** may appear as **different phase lag** for different frequencies!

## Example

Delay  $\approx 0.52$  sec between input and output.



(Upper): Period time =  $2\pi \approx 6.28$  sec. Delay represents phase lag of  $\frac{0.52}{6.28} \cdot 360 \approx 30$  deg

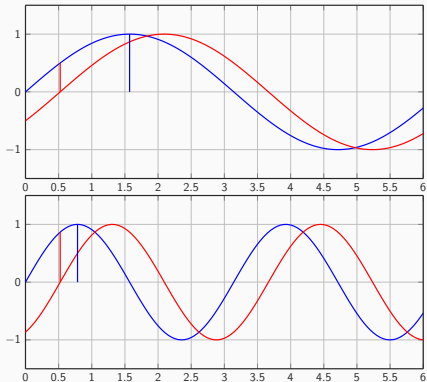
(Lower): Period time =  $\pi \approx 3.14$  sec. Delay represents phase lag of  $\frac{0.5}{3.14} \cdot 360 \approx 60$  deg.

# Bode Plot of $G(s) = e^{-sL}$

**Same delay** may appear as **different phase lag** for different frequencies!

## Example

Delay  $\approx 0.52$  sec between input and output.



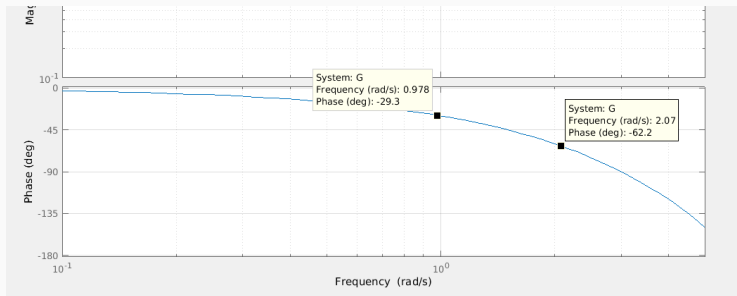
(Upper): Period time =  $2\pi \approx 6.28$  sec. Delay represents phase lag of  $\frac{0.52}{6.28} \cdot 360 \approx 30$  deg

(Lower): Period time =  $\pi \approx 3.14$  sec. Delay represents phase lag of  $\frac{0.5}{3.14} \cdot 360 \approx 60$  deg.

# Bode Plot of $G(s) = e^{-sL}$

Check phase in Bode diagram for  $e^{-0.52s}$  for

- $\sin(t) \Rightarrow \omega = 1.0 \text{ rad/s}$
- $\sin(2t) \Rightarrow \omega = 2.0 \text{ rad/s}$



```
>> s=tf('s')  
>> G=exp(-0.52*s);  
>> bode(G,0.1 ,5) % Bode plot in frequency-range [0.1 .. 5] rad/s
```

# Bode Plot of Composite Transfer Function

## Example

Draw the Bode plot of the transfer function

$$G(s) = \frac{100(s + 2)}{s(s + 20)^2}$$

First step, write it as product of sample transfer functions:

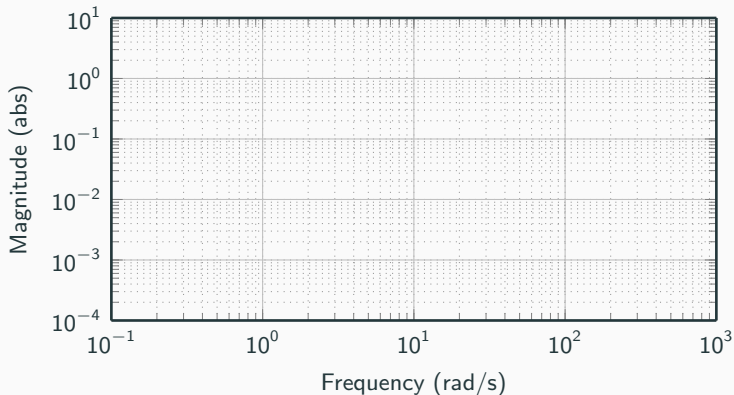
$$G(s) = \frac{100(s + 2)}{s(s + 20)^2} = 0.5 \cdot s^{-1} \cdot (1 + 0.5s) \cdot (1 + 0.05s)^{-2}$$

Then determine the corner frequencies:

$$G(s) = \frac{100(s + 2)}{s(s + 20)^2} = 0.5 \cdot s^{-1} \cdot \overbrace{(1 + 0.5s)}^{w_{c1}=2} \cdot \overbrace{(1 + 0.05s)^{-2}}^{w_{c2}=20}$$

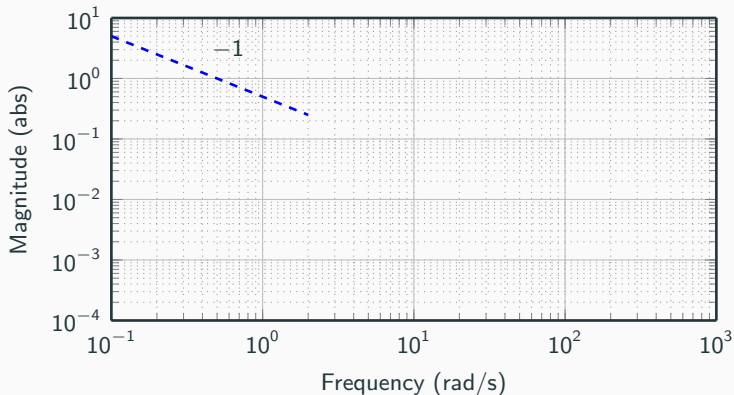
# Bode Plot of Composite Transfer Function

$$G(s) = \frac{100(s+2)}{s(s+20)^2} = 0.5 \cdot s^{-1} \cdot \overbrace{(1+0.5s)}^{w_{c1}=2} \cdot \overbrace{(1+0.05s)^{-2}}^{w_{c2}=20}$$



# Bode Plot of Composite Transfer Function

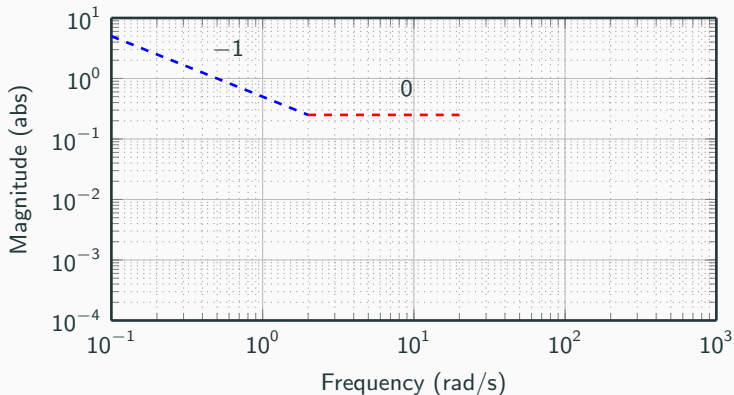
$$G(s) = \frac{100(s+2)}{s(s+20)^2} = 0.5 \cdot s^{-1} \cdot \overbrace{(1+0.5s)}^{w_{c1}=2} \cdot \overbrace{(1+0.05s)^{-2}}^{w_{c2}=20}$$





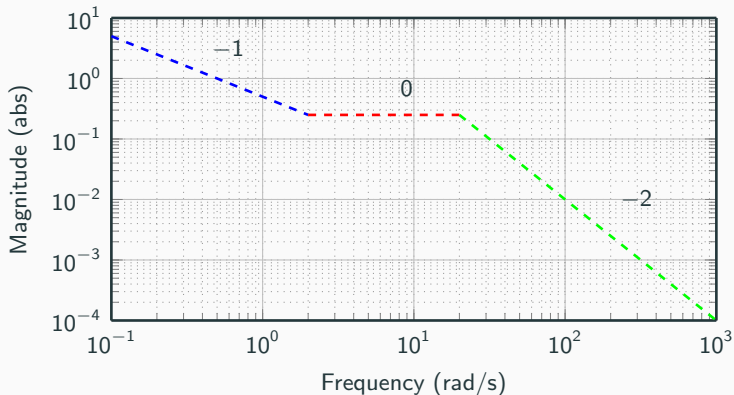
# Bode Plot of Composite Transfer Function

$$G(s) = \frac{100(s+2)}{s(s+20)^2} = 0.5 \cdot s^{-1} \cdot \overbrace{(1+0.5s)}^{w_{c1}=2} \cdot \overbrace{(1+0.05s)^{-2}}^{w_{c2}=20}$$



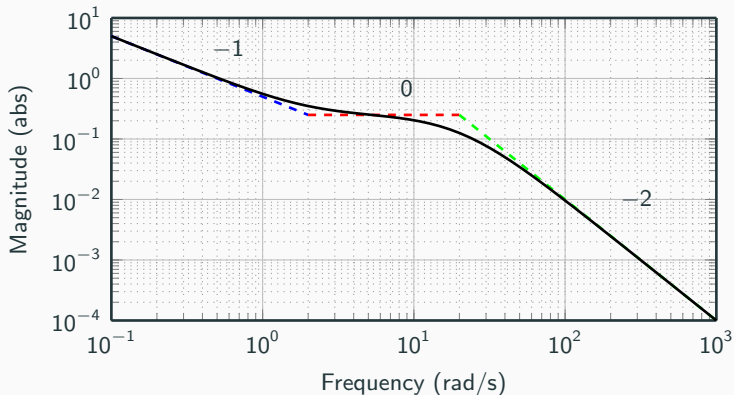
# Bode Plot of Composite Transfer Function

$$G(s) = \frac{100(s+2)}{s(s+20)^2} = 0.5 \cdot s^{-1} \cdot \overbrace{(1+0.5s)}^{w_{c1}=2} \cdot \overbrace{(1+0.05s)^{-2}}^{w_{c2}=20}$$



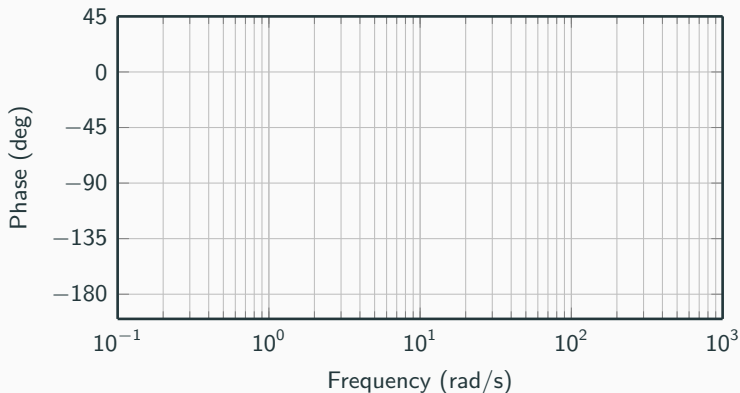
# Bode Plot of Composite Transfer Function

$$G(s) = \frac{100(s+2)}{s(s+20)^2} = 0.5 \cdot s^{-1} \cdot \overbrace{(1+0.5s)}^{w_{c1}=2} \cdot \overbrace{(1+0.05s)^{-2}}^{w_{c2}=20}$$



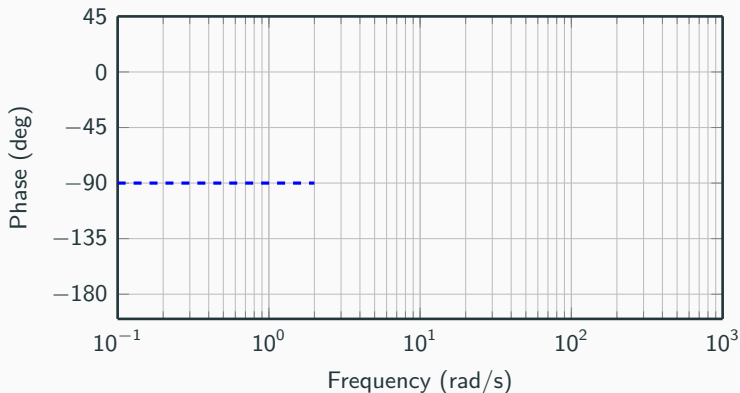
# Bode Plot of Composite Transfer Function

$$G(s) = \frac{100(s+2)}{s(s+20)^2} = 0.5 \cdot s^{-1} \cdot \overbrace{(1+0.5s)}^{w_{c1}=2} \cdot \overbrace{(1+0.05s)^{-2}}^{w_{c2}=20}$$



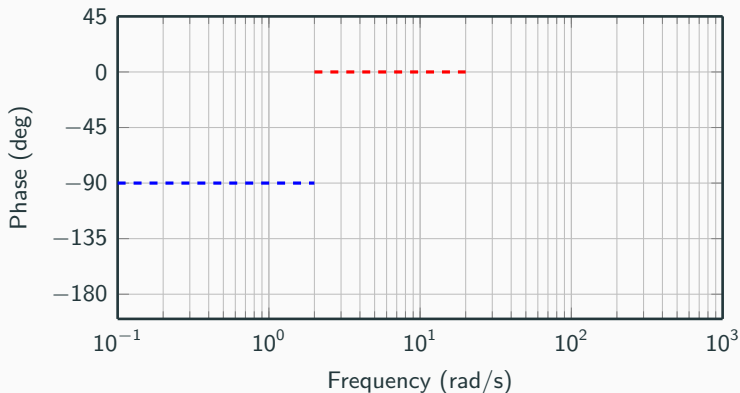
# Bode Plot of Composite Transfer Function

$$G(s) = \frac{100(s+2)}{s(s+20)^2} = 0.5 \cdot s^{-1} \cdot \overbrace{(1+0.5s)}^{w_{c1}=2} \cdot \overbrace{(1+0.05s)^{-2}}^{w_{c2}=20}$$



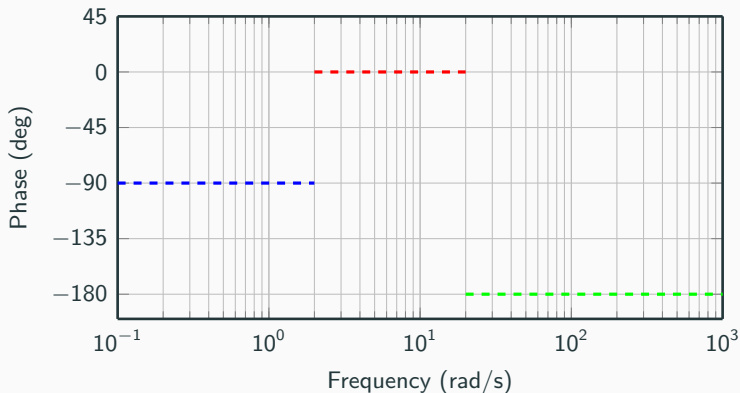
# Bode Plot of Composite Transfer Function

$$G(s) = \frac{100(s+2)}{s(s+20)^2} = 0.5 \cdot s^{-1} \cdot \overbrace{(1+0.5s)}^{w_{c1}=2} \cdot \overbrace{(1+0.05s)^{-2}}^{w_{c2}=20}$$



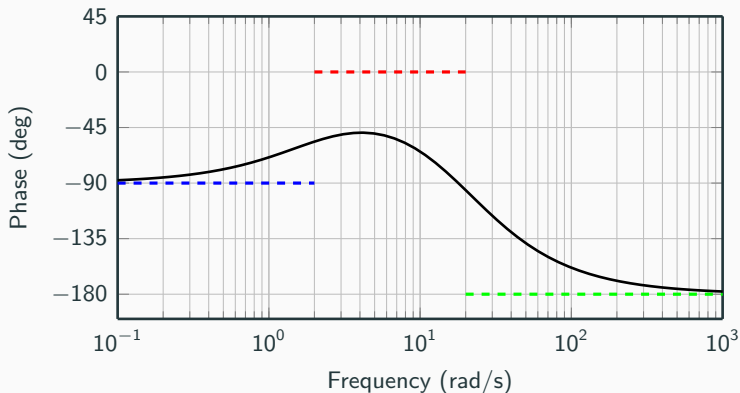
# Bode Plot of Composite Transfer Function

$$G(s) = \frac{100(s+2)}{s(s+20)^2} = 0.5 \cdot s^{-1} \cdot \overbrace{(1+0.5s)}^{w_{c1}=2} \cdot \overbrace{(1+0.05s)^{-2}}^{w_{c2}=20}$$



# Bode Plot of Composite Transfer Function

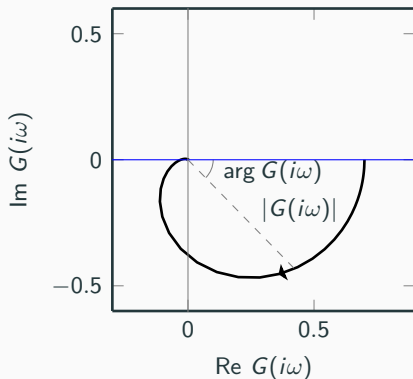
$$G(s) = \frac{100(s+2)}{s(s+20)^2} = 0.5 \cdot s^{-1} \cdot \overbrace{(1+0.5s)}^{w_{c1}=2} \cdot \overbrace{(1+0.05s)^{-2}}^{w_{c2}=20}$$





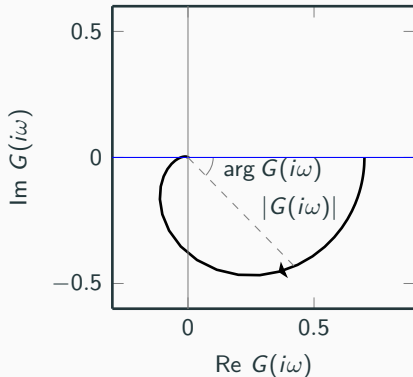
# Nyquist Plot

By removing the frequency information, we can plot the transfer function in one plot instead of two.



## Nyquist Plot

By removing the frequency information, we can plot the transfer function in one plot instead of two.

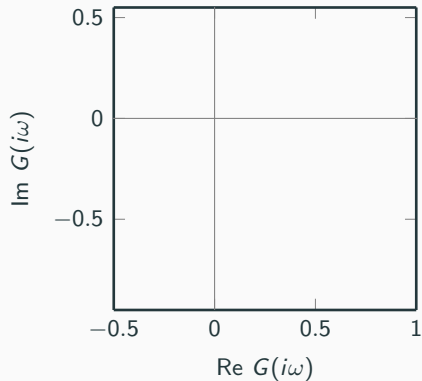
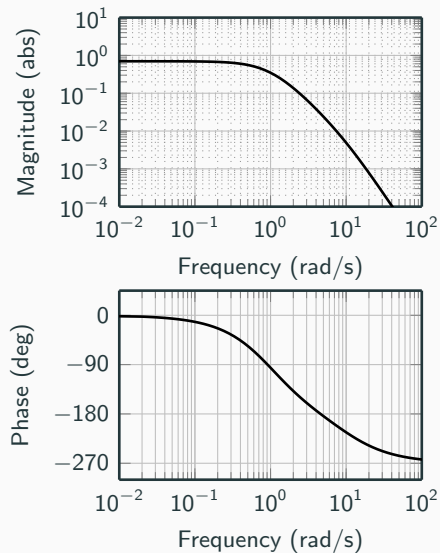


Split the transfer function into real and imaginary part:

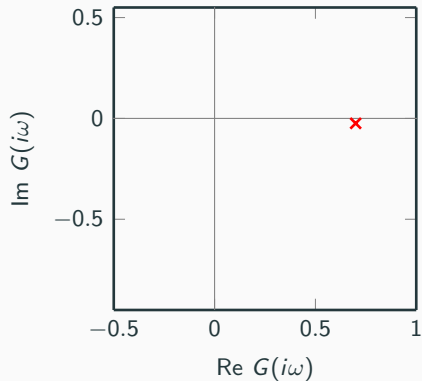
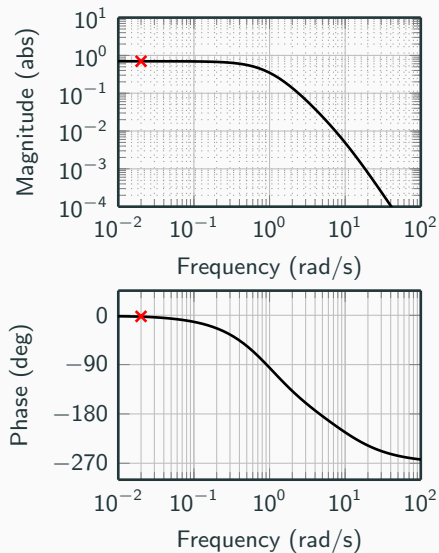
$$G(s) = \frac{1}{1+s} \quad G(i\omega) = \frac{1}{1+i\omega} = \frac{1}{1+\omega^2} - i \frac{\omega}{1+\omega^2}$$

Is this the transfer function in the plot above?

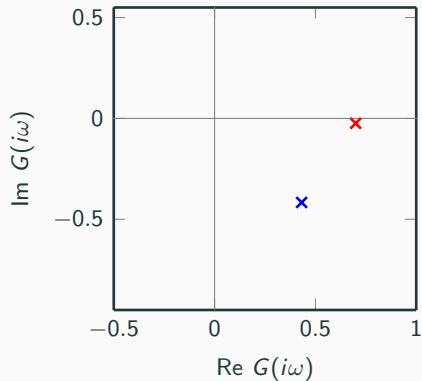
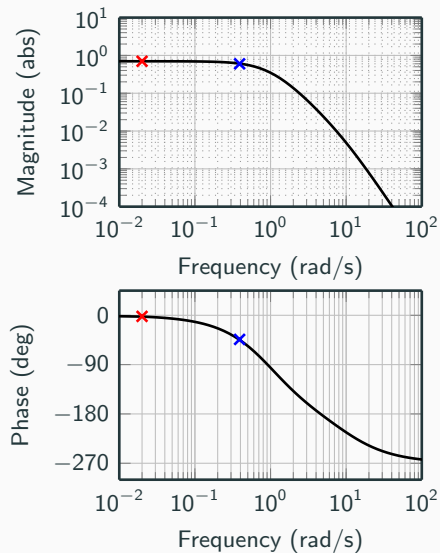
# From Bode Plot to Nyquist Plot



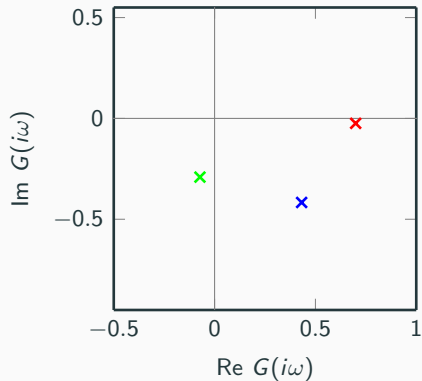
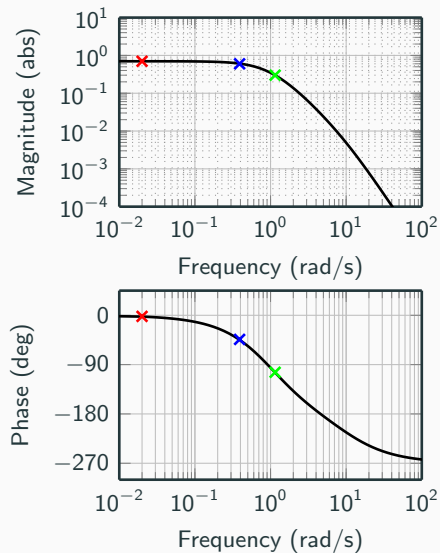
# From Bode Plot to Nyquist Plot



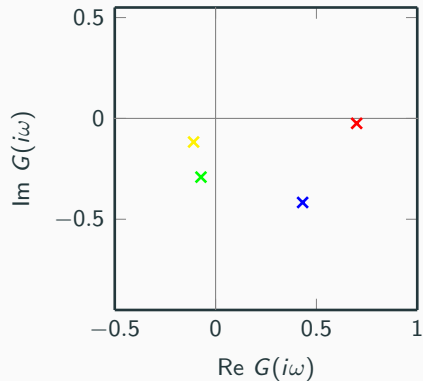
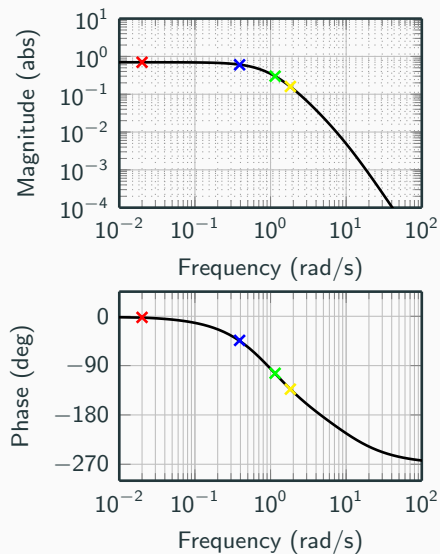
# From Bode Plot to Nyquist Plot



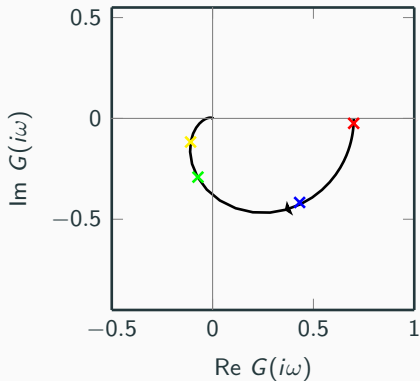
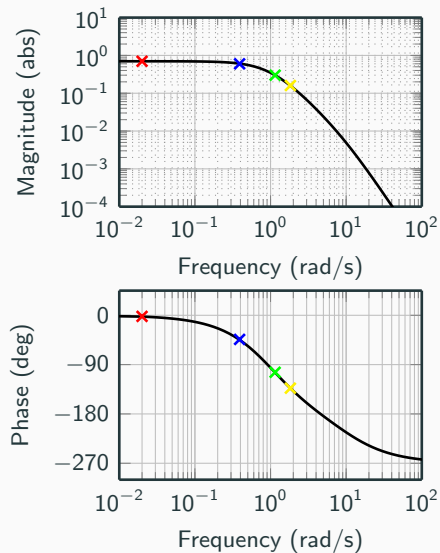
# From Bode Plot to Nyquist Plot



# From Bode Plot to Nyquist Plot



# From Bode Plot to Nyquist Plot





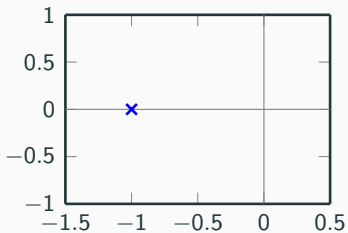
# Relation between Model Descriptions

---

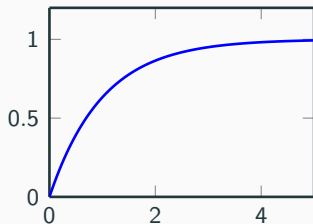
# Single-capacitive Processes

$$\frac{K}{sT+1}$$

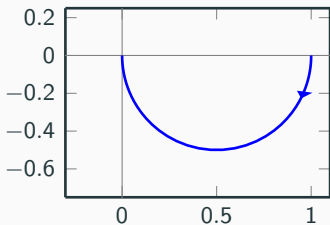
Singularity chart



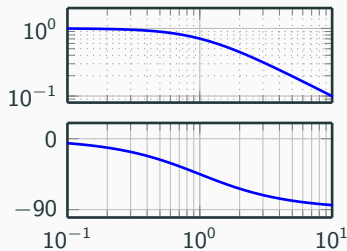
Step response



Nyquist plot



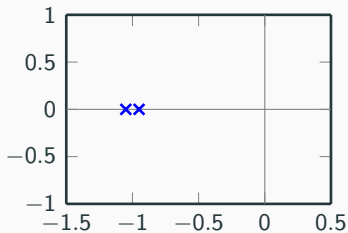
Bode plot



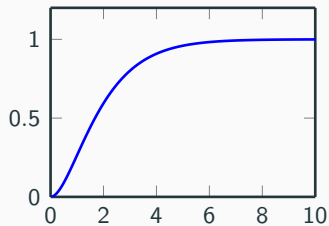
# Multi-capacitive Processes

$$\frac{K}{(sT_1+1)(sT_2+1)}$$

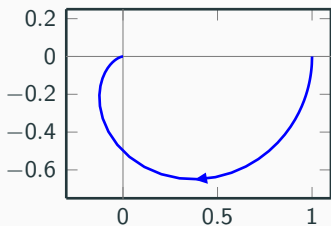
Singularity chart



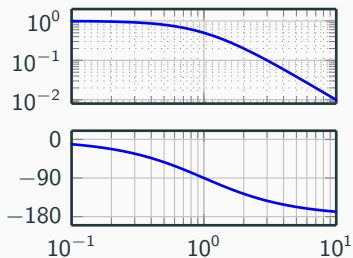
Step response



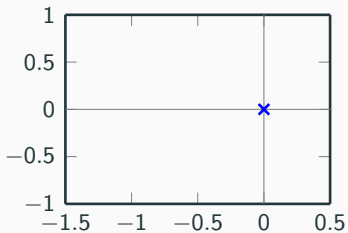
Nyquist plot



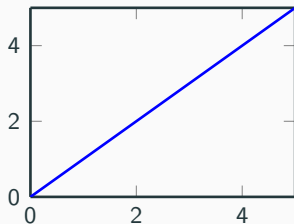
Bode plot



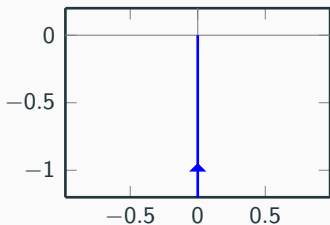
Singularity chart



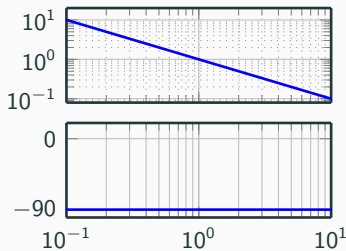
Step response



Nyquist plot



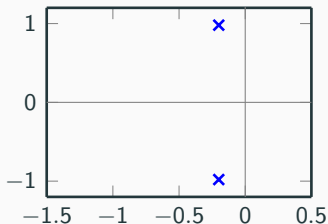
Bode plot



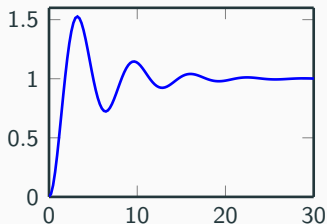
# Oscillative Processes

$$\frac{K\omega_0^2}{s^2+2\zeta\omega_0s+\omega_0^2}, \quad 0 < \zeta < 1$$

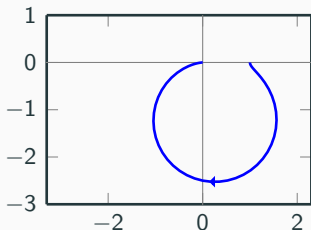
Singularity chart



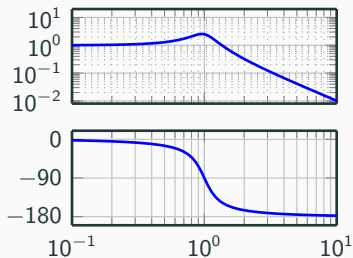
Step response



Nyquist plot



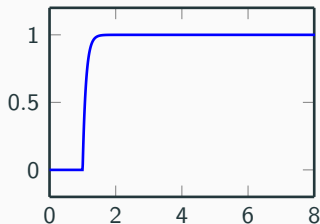
Bode plot



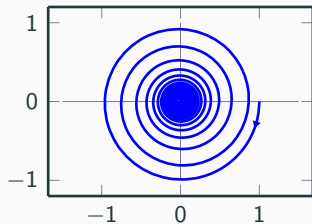
# Delay Processes

$$\frac{K}{sT+1} e^{-sL}$$

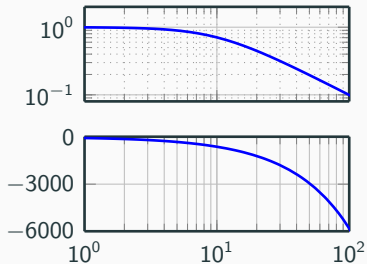
Step response



Nyquist plot



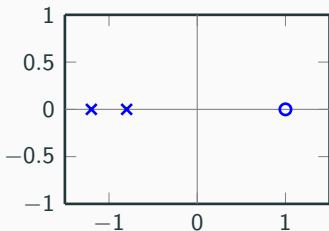
Bode plot



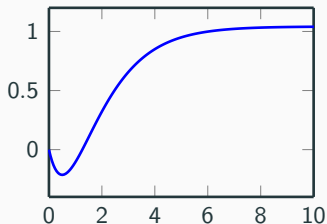
# Process with Inverse Responses

$$\frac{-sa+1}{(sT_1+1)(sT_2+1)}$$

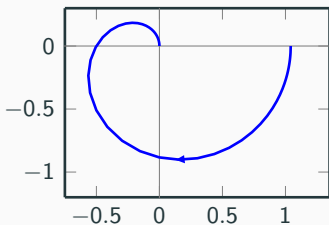
Singularity chart



Step response



Nyquist plot



Bode plot

